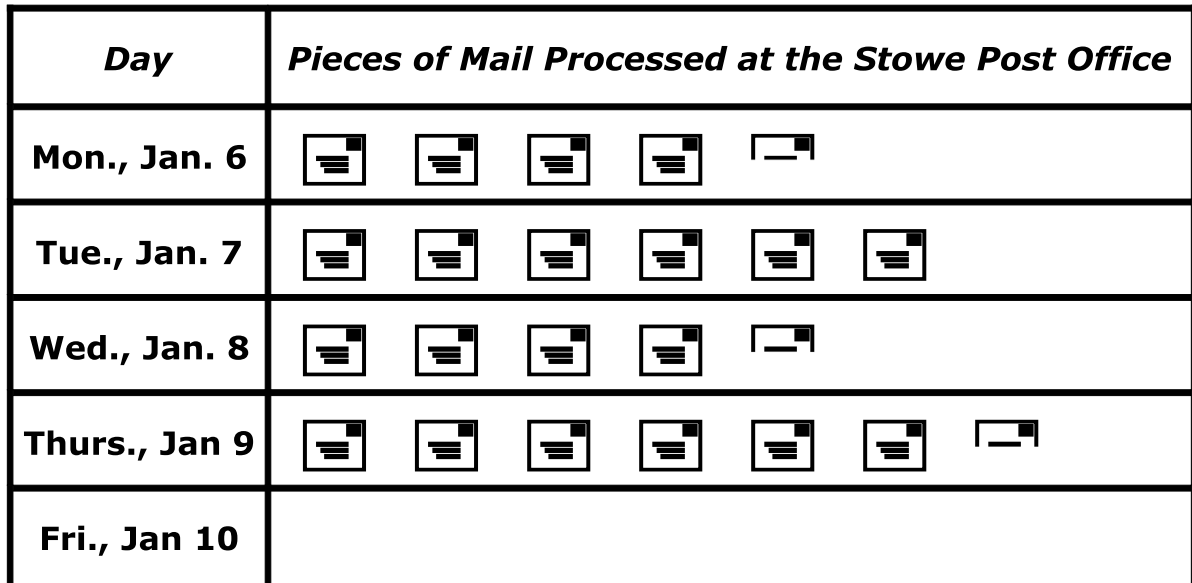


Name: _____


Post Office Pictograph

The pictograph below shows how much mail was processed by the Stowe Post Office. Use the graph to answer the questions.

Stowe Post Office Mail Processing



Key:  = 2,000 pieces of mail

1. What does each  symbol stand for? 1. _____
2. Which day did they process the most mail? 2. _____
3. How much more mail was processed on Thursday than Monday? 3. _____
4. A post office employee says, "We always process more mail on Tuesdays than we do on Mondays." Is he telling the truth? Explain.

5. How many symbols would be used to represent 3,000 pieces of mail on the chart.

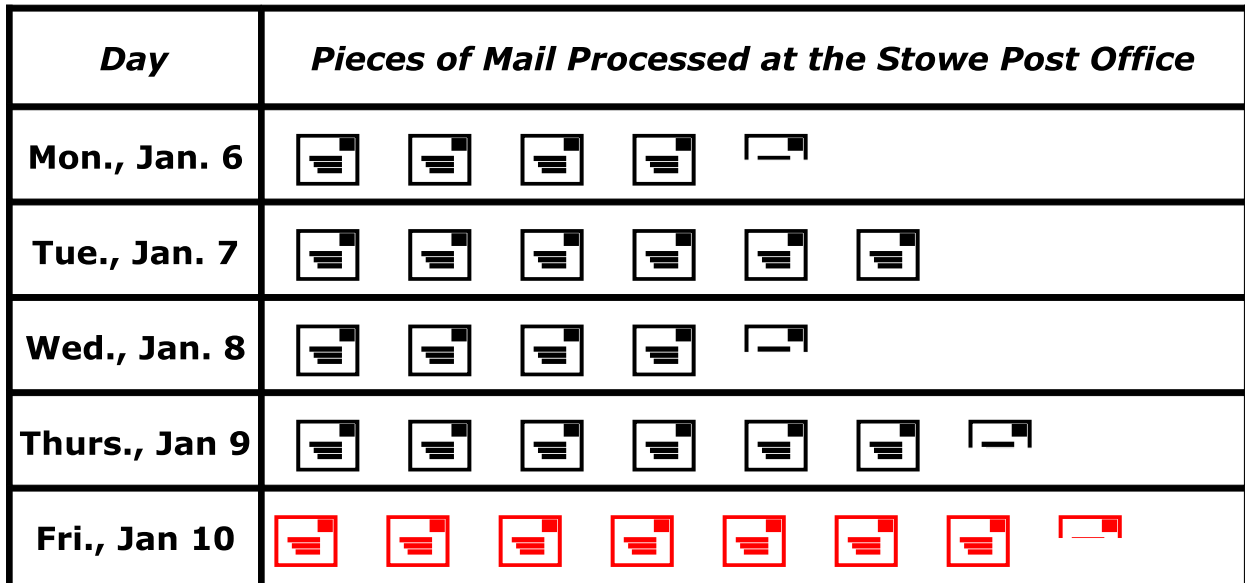
6. 15,000 pieces of mail were processed on January 10. Complete the pictograph to show this amount.

Name: _____


Post Office Pictograph - ANSWER KEY

The pictograph below shows how much mail was processed by the Stowe Post Office. Use the graph to answer the questions.

Stowe Post Office Mail Processing



Key:  = 2,000 pieces of mail

1. What does each  symbol stand for?
1. **1,000 pieces of mail**
2. Which day did they process the most mail?
2. **Thursday, January 9**
3. How much more mail was processed on Thursday than Monday?
3. **4,000 pieces of mail**
4. A post office employee says, "We always process more mail on Tuesdays than we do on Mondays." Is he telling the truth? Explain.
Yes because there were 12,000 pieces of mail process on Tues and 11,000 on Mon
5. How many symbols would be used to represent 3,000 pieces of mail on the chart.
One and a half
6. 15,000 pieces of mail were processed on January 10. Complete the pictograph to show this amount.